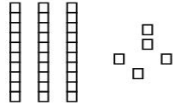


Name: _____

CCSS 2.NBT.1 Understand place value
Primer, Prerequisite

Place Value

Directions: Write how many tens and ones. Then write the number.



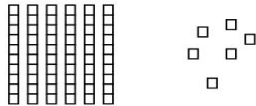
___ tens ___ ones

___ + ___ = ___



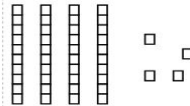
___ tens ___ ones

___ + ___ = ___



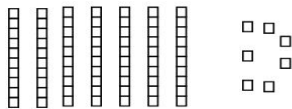
___ tens ___ ones

___ + ___ = ___



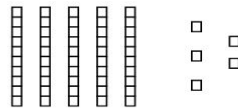
___ tens ___ ones

___ + ___ = ___



___ tens ___ ones

___ + ___ = ___



___ tens ___ ones

___ + ___ = ___