

Let's skip count!

NAME: _____ Instructions: Skip count in 100's to fill in the missing numbers

229 329 _____

394 _____ 594 _____

216 _____ 416 _____

190 290 _____




302 402 _____




255 _____ 755 _____




123 223 _____ 823




Comparing numbers

NAME: _____ Instructions: compare the two numbers.
In the circle write either $<$, $>$, or $=$.

 193  139
106  601

 286  268
696  669

 428  248
296  392

 193  931
393  393

