







Name: _____

Math Practice: Recognize and draw shapes (2.G.1)

Monday

Name the shape.

 _____	 _____	 _____
 _____	 _____	 _____

Shape Attributes. Name and draw the shape.

Shape Attributes	Name the shape	Draw the shape
I am a polygon with 4 sides and 4 angles. All my sides are the same length. My opposite sides are parallel.		
I am a polygon with 3 sides and 3 angles.		
I am a polygon with 4 sides and 4 angles. I have 2 sides that are longer than my other 2 sides. All my opposite sides are parallel.		