

Name : _____

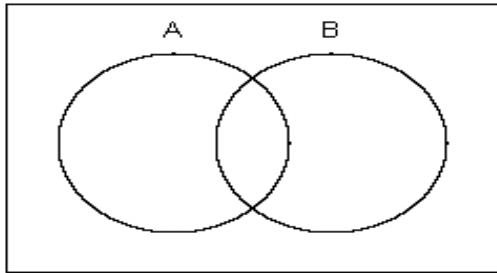
Score : _____

Teacher : _____

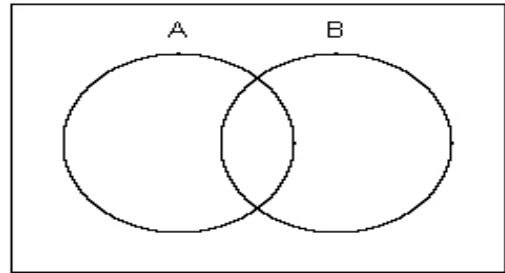
Date : _____

Shade the Venn Diagrams

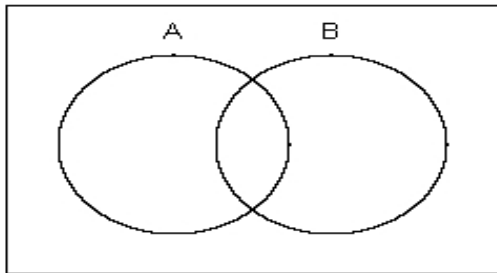
1) Shade $A' - B'$



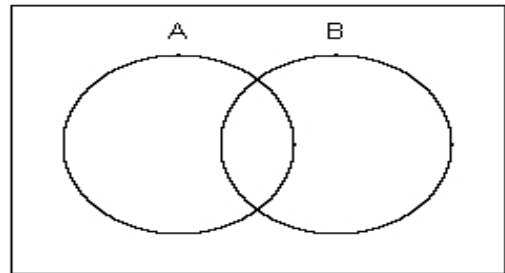
2) Shade $(A \cap B)'$



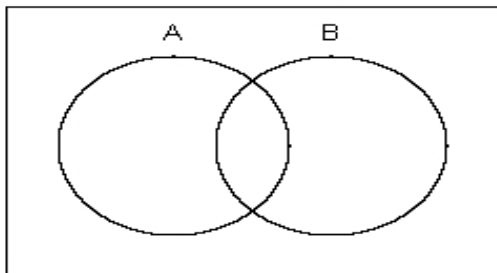
3) Shade $(B - A)'$



4) Shade $A' \cup B'$



5) Shade A



6) Shade $A \cap B$

