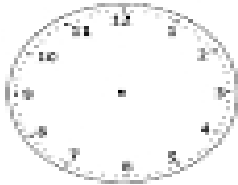



Name: _____

Drawing Hands on Clock


Draw hands in the clock to show the time given below.



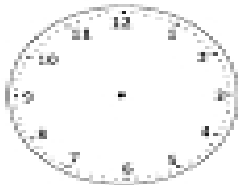
11:00




5:00



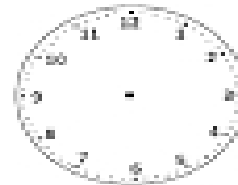
2:00




8:00




7:00




1:00



10:00



4:00



6:00
