





K.MD.B.3

Name: _____

Spring Graphing

Cut and sort spring objects. Complete the sentences.

| | | | | | |
|--|--|--|--|--|--|
|  | | | | | |
|  | | | | | |
|  | | | | | |
|  | | | | | |

There are more _____ than any other object.

There are the same number of _____ as

_____.

