


Name: _____


Date: _____


Repeat Addition

Use repeated addition to find the sum.

1. 
 $\bigcirc + \bigcirc + \bigcirc = \bigcirc$

2. 
 $\bigcirc + \bigcirc + \bigcirc = \bigcirc$

3. 
 $\bigcirc + \bigcirc + \bigcirc = \bigcirc$

4. 
 $\bigcirc + \bigcirc + \bigcirc = \bigcirc$