


Name _____

Place Value

Directions: Write how many tens and ones for each number.




32

___ tens
___ ones




23

___ tens
___ ones




40

___ tens
___ ones




34

___ tens
___ ones



100

___ tens
___ ones



105

___ tens
___ ones