

# Calculating Perimeter

Name \_\_\_\_\_  
Date \_\_\_\_\_

Find the perimeter of the following regular shapes! They are not scaled



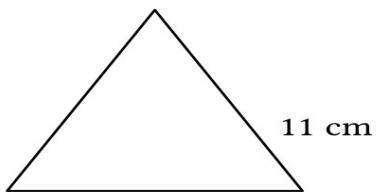
Perimeter = \_\_\_\_\_



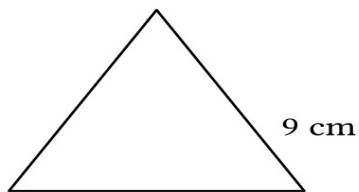
Perimeter = \_\_\_\_\_



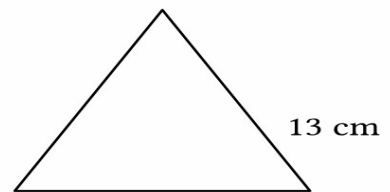
Perimeter = \_\_\_\_\_



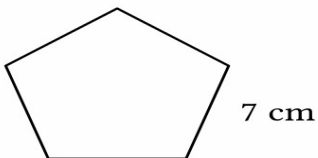
Perimeter = \_\_\_\_\_



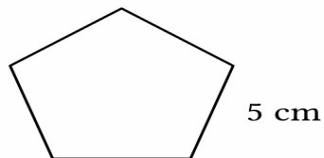
Perimeter = \_\_\_\_\_



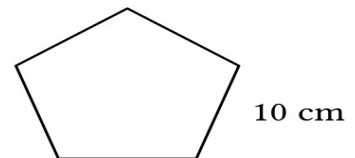
Perimeter = \_\_\_\_\_



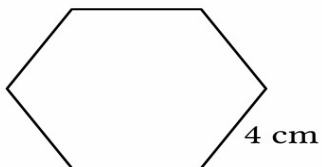
Perimeter = \_\_\_\_\_



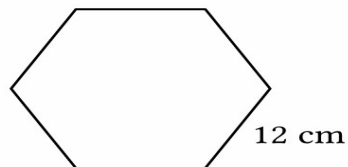
Perimeter = \_\_\_\_\_



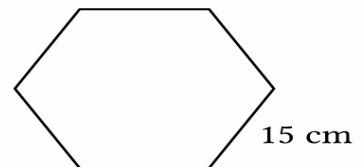
Perimeter = \_\_\_\_\_



Perimeter = \_\_\_\_\_



Perimeter = \_\_\_\_\_



Perimeter = \_\_\_\_\_