

Name Taylor

Date 1-13-14

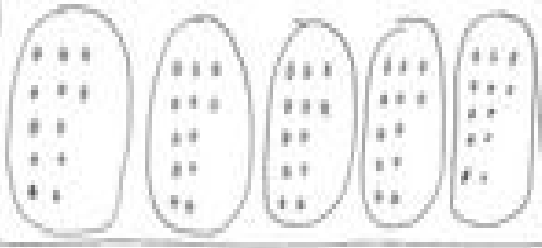
Level 2 # 1

3043




Bailey made 5 bracelets. Each bracelet has 12 beads.
How many beads did Bailey use?

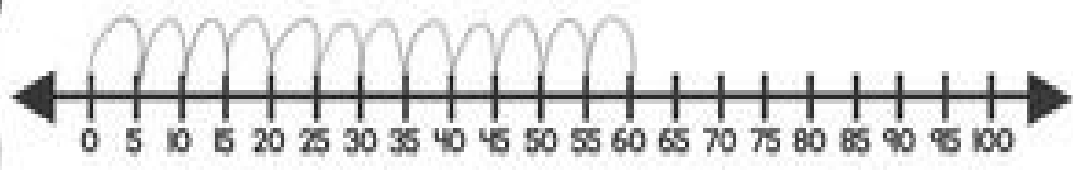
Groups of



An Array



Jumps on a number line



Equation

$$5 \times 12 = 60$$

The answer in a complete sentence.

Bailey used 60 beads.