

NAME: _____








CLASS: _____

Moon Phase Quiz

Part 1: Write the names of the moon phases in order, starting with the New Moon.

1. _____
2. _____
3. _____
4. _____
5. _____
6. _____
7. _____
8. _____

Part 2: Shade in the part of the moon you don't see during each phase.

New Moon 	Waning Crescent 	Waxing Gibbous 
Waning Gibbous 	Last Quarter 	Waxing Crescent 
First Quarter 	Full Moon 