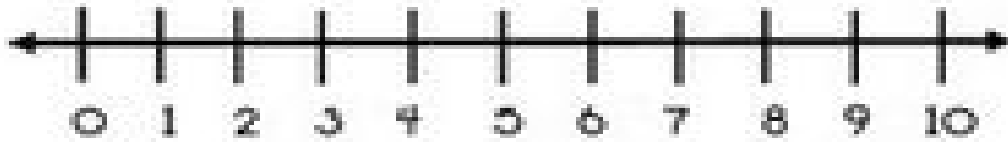






















Name: \_\_\_\_\_



Use the number line to find the missing addends.

- |  |  |
|--|--|
| 1.  + 4 = 9     | 11.  + 2 = 8    |
| 2.  + 3 = 8     | 12.  + 5 = 8    |
| 3.  + 2 = 7     | 13.  + 2 = 10   |
| 4.  + 4 = 10   | 14.  + 3 = 10  |
| 5.  + 3 = 7   | 15.  + 1 = 7  |
| 6.  + 3 = 9   | 16.  + 4 = 7  |
| 7.  + 8 = 10  | 17.  + 3 = 6  |
| 8.  + 2 = 6   | 18.  + 3 = 4  |
| 9.  + 4 = 8   | 19.  + 2 = 8  |
| 10.  + 5 = 10 | 20.  + 1 = 10 |