

Name : _____

Score : _____

Teacher : _____

Date : _____

Converting English and Metric

1) _____ ounces = 10.5 grams

1)

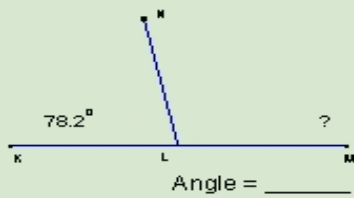
2)

3)

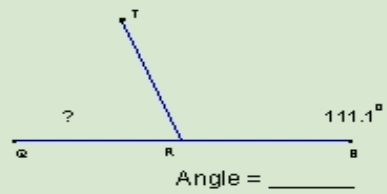
9.5 cubic yards
Angle = _____

Angle = _____

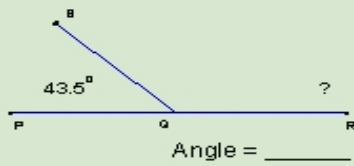
4)



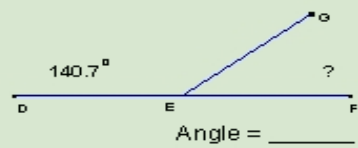
3)



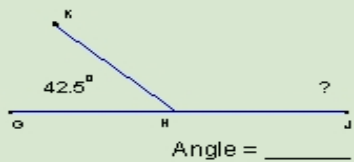
5)



5)



6)



7)

