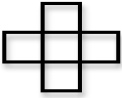
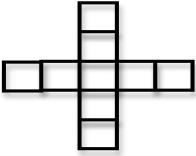
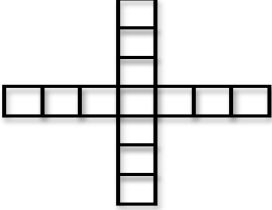


<p>The Problem:</p> <div style="display: flex; justify-content: space-around; align-items: center; margin-top: 10px;"> <div style="text-align: center;">  <p>1.</p> </div> <div style="text-align: center;">  <p>2.</p> </div> <div style="text-align: center;">  <p>3.</p> </div> </div> <p style="margin-top: 10px;">Elisabeth made this pattern with blocks. How many blocks will she need for the 10th level of this pattern?</p>	
<p>What do we want to know?</p>	
<p>What is the important information?</p>	
<p>How should we go about solving this problem?</p>	
<p>Strategy Toolbox:</p> <ul style="list-style-type: none"> Add Subtract Multiply Divide Make a picture Make a table Make a model Make the problem smaller Guess and check Work backwards 	<p>Workspace (attach other pages if needed)</p>