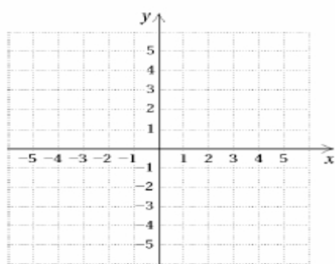


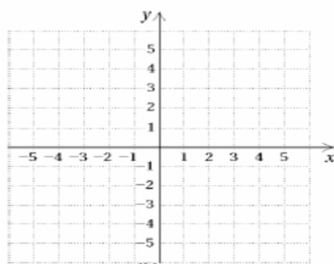
Name \_\_\_\_\_ Date \_\_\_\_\_ Period \_\_\_\_\_

**Graphing Linear Equations Using A Table of Values**

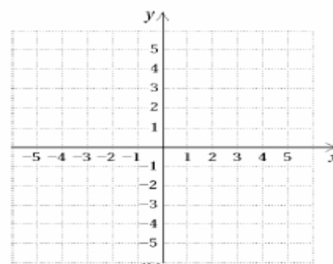
1.  $y = x - 2$



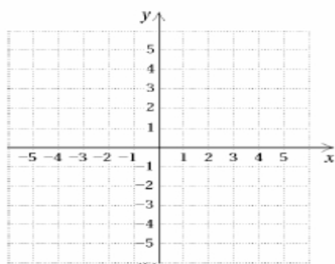
2.  $y = -x$



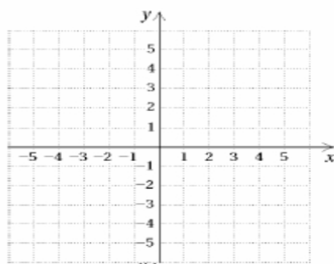
3.  $y = -3x - 1$



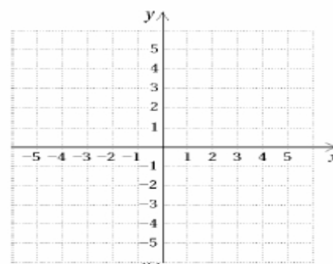
4.  $y = -4 - x$



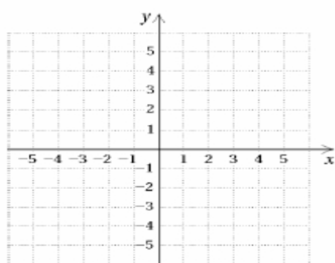
5.  $y = -3x$



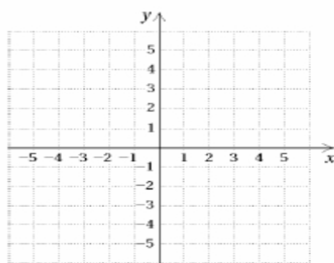
6.  $y = -5x - 4$



7.  $y = -4 - x$



8.  $y = -x$



9.  $y = -1/3x + 2$

