


Mass

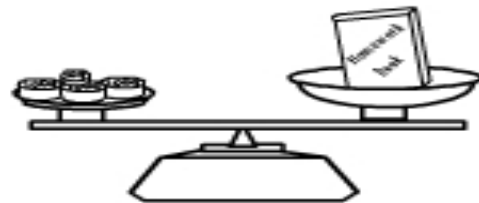
Name: _____

Measuring mass in grams and kilograms.

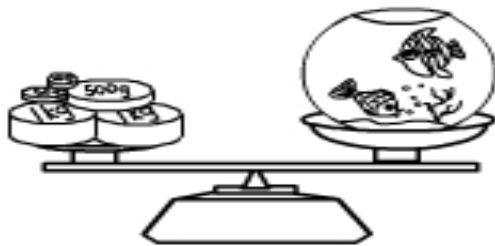
These are the masses we
used to measure objects
on the balancing scales.

**1 kg****500g****100g****50g****10g****5g**

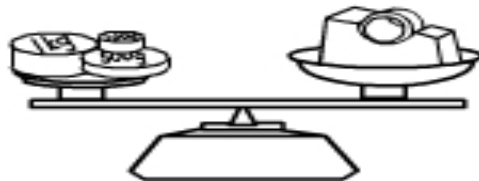
The teddy bear weighs _____ g



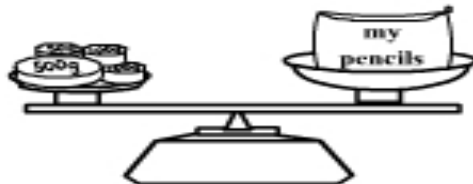
The book weighs _____ g



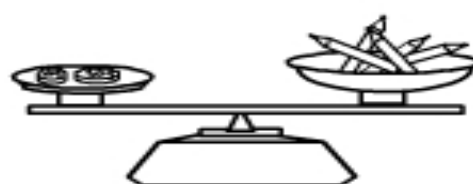
The fishtank weighs _____ g



The tape dispenser weighs _____ g



The pencilcase weighs _____ g



The pencils weighs _____ g