

Name Chris

Date 2/5/14

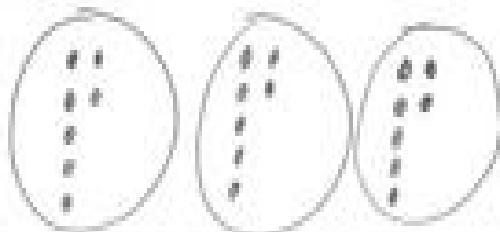
Level 1 # 12

3043


Brayden is buying notebooks. Each notebook costs \$3.00. How many notebooks can he buy with \$21.00?



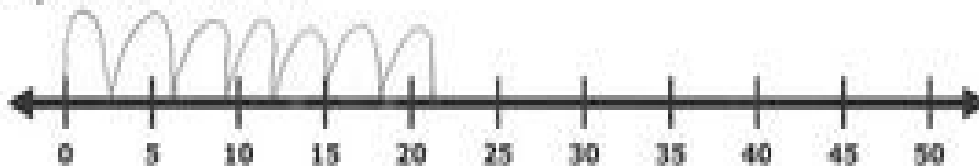
Groups of



An Array



Jumps on a number line



Equation

$$\$21.00 \div \$3.00 = \$7.00$$

The answer in a complete sentence.

Brayden can buy  
7 notebooks.