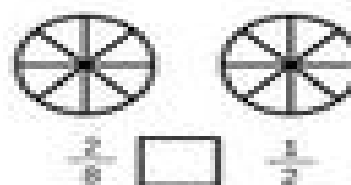
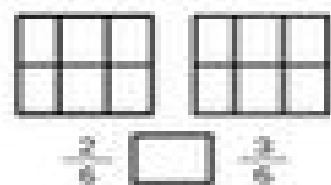
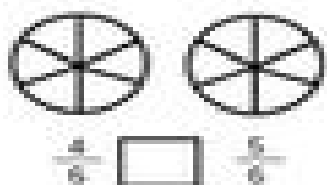

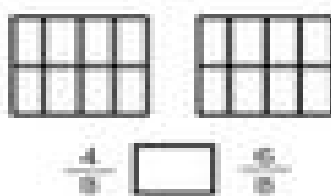
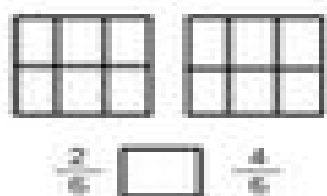
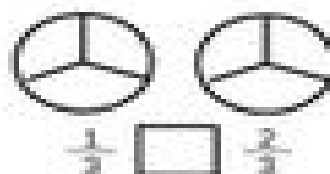
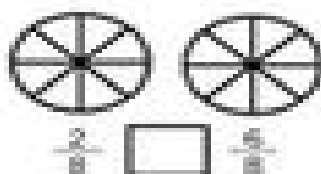
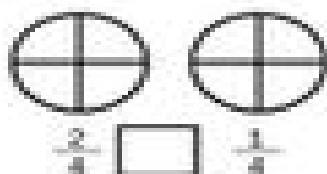


Time _____

Date _____

Shade in the fraction shown, then write use $>$, $<$, or $=$ to compare the two fractions.



Put these fractions in order: $\frac{4}{6}$ $\frac{2}{6}$ $\frac{7}{6}$

Use the circles to help you!

