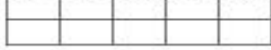


Name: _____

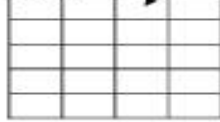
Math Practice: Area (3.MD.5)

Tuesday

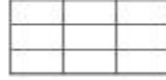
Write the number of square units.



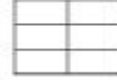
_____ square units



_____ square units

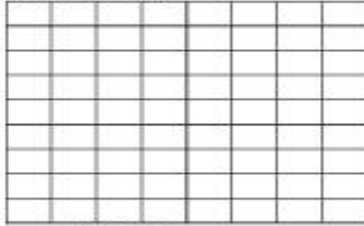


_____ square units

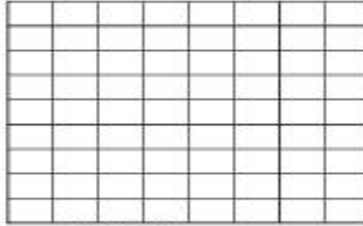


_____ square units

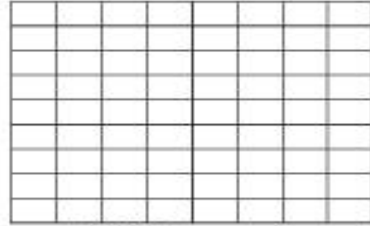
Shade the area.



Shade 20 square units

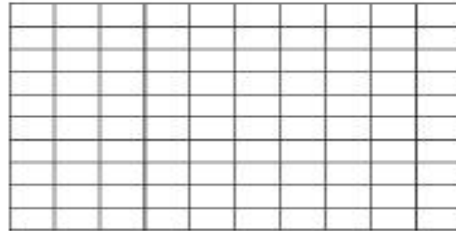
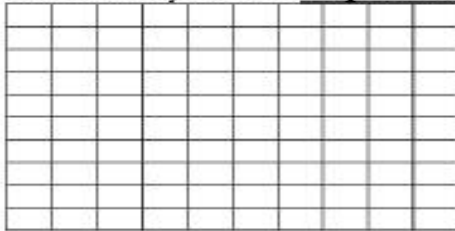


Shade 15 square units



Shade 8 square units

Show 2 different ways to shade 27 square units.



Using the grid section below, draw a rectangular representation of 36 square units. Explain your drawing on the lines provided.

