








180. Identify and classify shapes. **Page 1**
 (Identifying) (Classifying)

Look carefully at some 3-D shapes and fill in the spaces in the table below:

Shape Name	Shape Picture	Number of Edges/Faces	Number of Vertices/Corners (including openings)	Number of Edges/Faces	Number of Edges/Faces
Cube		0	0	0	0
Cylinder					
Triangular Prism					
Hexagonal Prism					
Cylindrical Prism					
Square Based Pyramid					
Triangular Pyramid					
Octahedron	