

Array Multiplication


Complete the multiplication equation that describes each array.

Name: _____

Date: _____




$4 \times \underline{\quad} = 8$




$\underline{\quad} \times 3 = 9$




$\underline{\quad} \times 5 = 15$



$\underline{\quad} \times 2 = 4$



$\underline{\quad} \times 3 = 12$



$2 \times \underline{\quad} = 6$



$\underline{\quad} \times 4 = 20$



$\underline{\quad} \times 1 = 3$