



## Calculating Area & Perimeter

Name: \_\_\_\_\_ Date: \_\_\_\_\_

Calculate the area and perimeter of each shape.

170



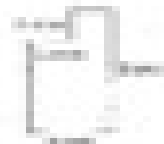
Perimeter: \_\_\_\_\_  
Area: \_\_\_\_\_

171




Perimeter: \_\_\_\_\_  
Area: \_\_\_\_\_

172



Perimeter: \_\_\_\_\_  
Area: \_\_\_\_\_

173




Perimeter: \_\_\_\_\_  
Area: \_\_\_\_\_

174




Perimeter: \_\_\_\_\_  
Area: \_\_\_\_\_

175




Perimeter: \_\_\_\_\_  
Area: \_\_\_\_\_

176




Perimeter: \_\_\_\_\_  
Area: \_\_\_\_\_

177




Perimeter: \_\_\_\_\_  
Area: \_\_\_\_\_

178




Perimeter: \_\_\_\_\_  
Area: \_\_\_\_\_

179




Perimeter: \_\_\_\_\_  
Area: \_\_\_\_\_

180



Perimeter: \_\_\_\_\_  
Area: \_\_\_\_\_

181



Perimeter: \_\_\_\_\_  
Area: \_\_\_\_\_