


Name : _____

Score : _____

Tens & Ones


How many tens can you form? Also find the ones that left over.

1)




_____ tens _____ ones

2)



_____ tens _____ ones

3)




_____ tens _____ ones

4)




_____ tens _____ ones

5)




_____ tens _____ ones

6)




_____ tens _____ ones

7)



_____ tens _____ ones

8)



_____ tens _____ ones