

Square numbers



- This square has two rows and two columns. It is 2×2 .
- How many dots are there?


Draw a picture like the one above to show each of these numbers.



How many dots are there?




How many dots are there?




How many dots are there?




How many dots are there?




How many dots are there?



How many dots are there?



How many dots are there?



How many dots are there?