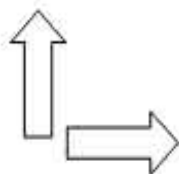


**Directions:** Choose the correct answer to each of the following problems.

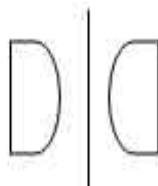
1.



The above arrow moved to the right. This is an example of a \_\_\_\_\_.

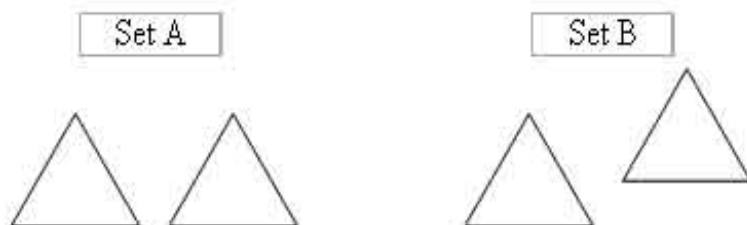
- A. slide      B. flip      C. turn

2. The example below is a demonstration of a \_\_\_\_\_.



- A. slide      B. flip      C. turn

3. The change in the position of the triangles in Set A to the position of the triangles in Set B is an illustration of a \_\_\_\_\_.



- A. slide      B. flip      C. turn

4. The example below is a demonstration of a \_\_\_\_\_.