

Print

Name: \_\_\_\_\_

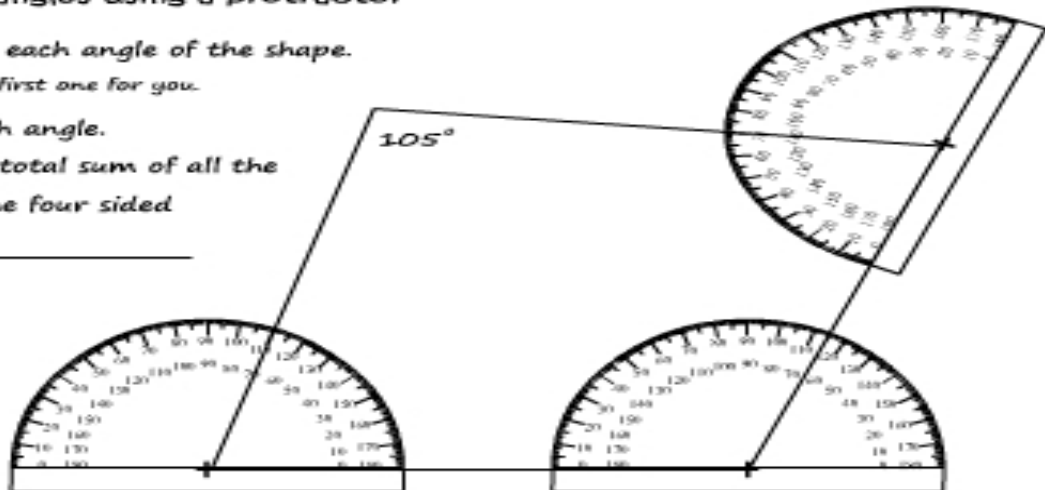
## Measuring angles using a protractor

1) Measure each angle of the shape.

I've done the first one for you.

2) Add each angle.

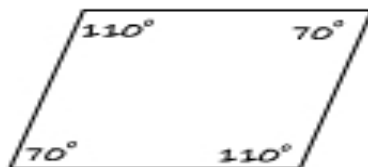
What's the total sum of all the angles of the four sided shape? \_\_\_\_\_



## The sum of all angles of a four sided shape

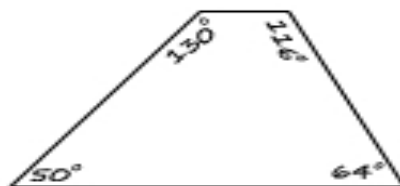
Calculate the total sum of all four angles in each shape.

1)




total sum: \_\_\_\_\_

2)



total sum: \_\_\_\_\_

3)



total sum: \_\_\_\_\_

4)



total sum: \_\_\_\_\_

Conclusion: The total sum of all the angles of any 4 sided shape is \_\_\_\_\_