


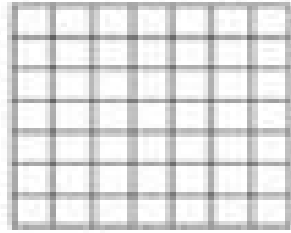
Name _____

Arrays


Roll the two dice. Record the numbers and draw the array to find the product.




$___ \times ___ = ___$



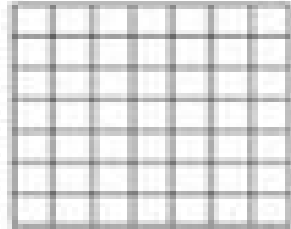
$___ \times ___ = ___$



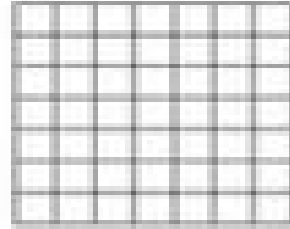
$___ \times ___ = ___$




$___ \times ___ = ___$



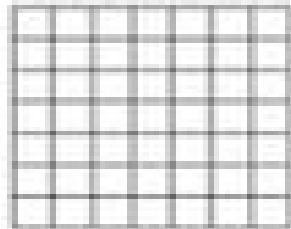
$___ \times ___ = ___$




$___ \times ___ = ___$



$___ \times ___ = ___$



$___ \times ___ = ___$



$___ \times ___ = ___$