

Score

8


02-01-02-004-s

Name: \_\_\_\_\_  
Date: \_\_\_\_\_


Subject: Year 2 Numeracy  
Unit: Measure and length

Measure the pencils below:

1)  \_\_\_\_\_ cms


2)  \_\_\_\_\_ cms

3)  \_\_\_\_\_ cms

4)  \_\_\_\_\_ cms

5)  \_\_\_\_\_ cms

6)  \_\_\_\_\_ cms

7)  \_\_\_\_\_ cms

8)  \_\_\_\_\_ cms