







Name: _____

Monday

Math Practice: Recognize and draw shapes (2.G.1)

Identify and describe the 3-D Shape.

| | |
|--|---|
|  Shape Name: _____ | Number of Faces: _____ Number of Vertices: _____ Number of Edges: _____ |
|  Shape Name: _____ | Number of Faces: _____ Number of Vertices: _____ Number of Edges: _____ |
|  Shape Name: _____ | Number of Faces: _____ Number of Vertices: _____ Number of Edges: _____ |
|  Shape Name: _____ | Number of Faces: _____ Number of Vertices: _____ Number of Edges: _____ |
|  Shape Name: _____ | Number of Faces: _____ Number of Vertices: _____ Number of Edges: _____ |
|  Shape Name: _____ | Number of Faces: _____ Number of Vertices: _____ Number of Edges: _____ |