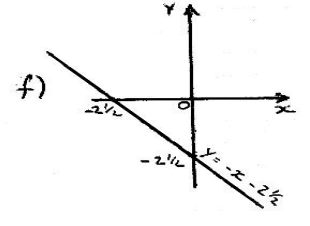
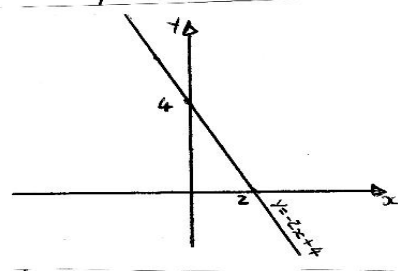
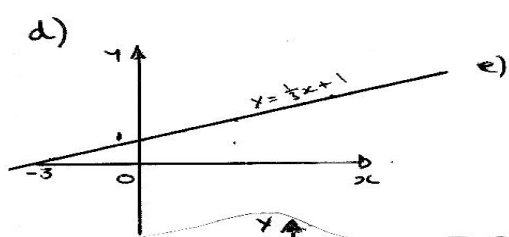
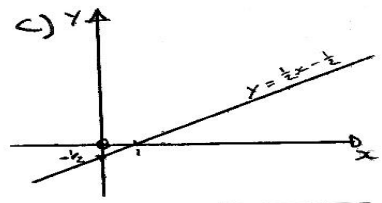
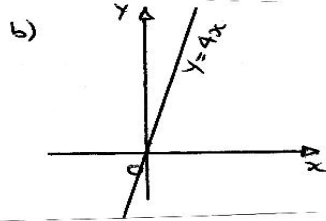
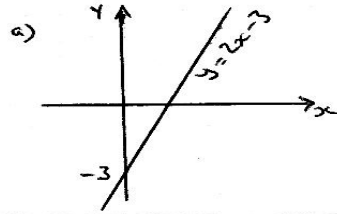


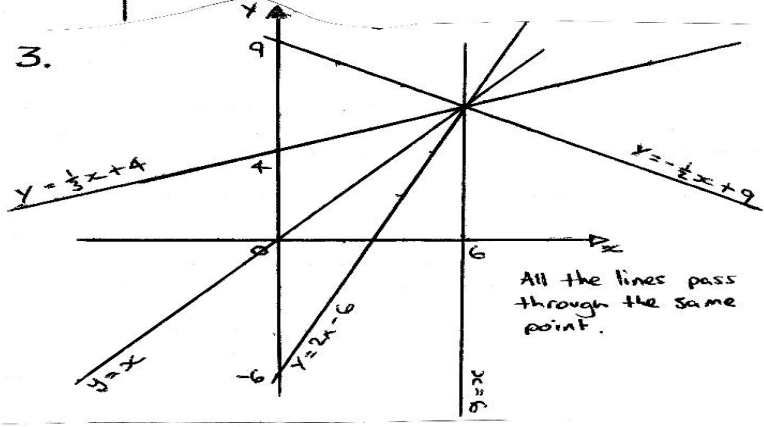
ANSWERS

1. a) $m=4, c=2$ b) $m=-3, c=9$ c) $m=2, c=1/2$ d) $m=3, c=-9$ e) $m=1, c=0$

2.



3.

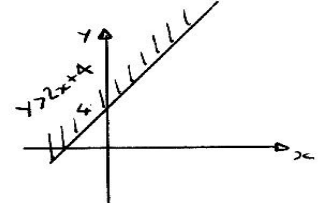


4. a) $m=2, c=2; y=2x+2$

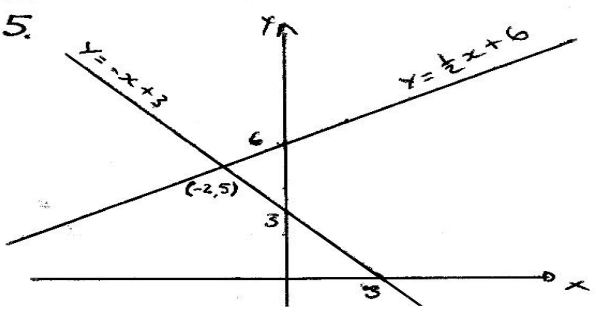
b) $m=3/2, c=-2; y=3/2x-2$

c) $m=-1/2, c=-2; y=-1/2x-2$

6.



5.



7. $m=2/3; y=2/3x+2$

8. $m=-1; y=-x+5$