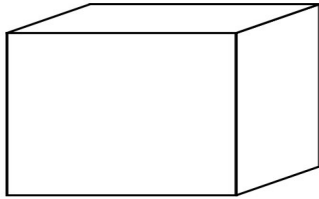


Name \_\_\_\_\_ Date \_\_\_\_\_

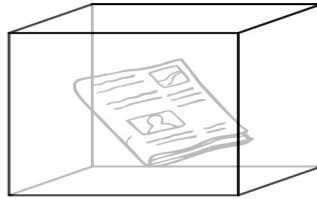


# LIGHT ENERGY


Label each picture as transparent, opaque, or translucent.



\_\_\_\_\_



\_\_\_\_\_



\_\_\_\_\_

Answer the questions about light below.

List 3 Example of light energy:

1. \_\_\_\_\_
2. \_\_\_\_\_
3. \_\_\_\_\_

Identify whether the following objects are probably opaque, translucent, or transparent.

1. Window \_\_\_\_\_
2. Wall \_\_\_\_\_
3. Water \_\_\_\_\_
4. Rock \_\_\_\_\_

What is it called when light bounces back in the opposite direction?

\_\_\_\_\_