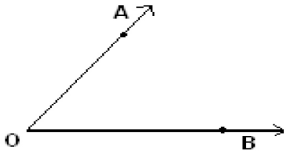
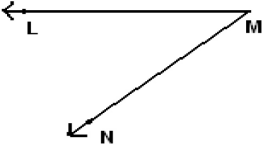

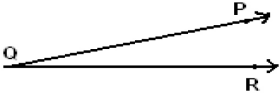

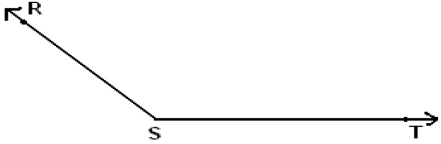
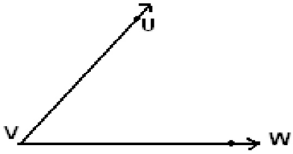
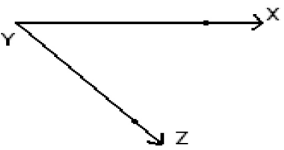


Student Name: _____

Score: _____

Vertex and Sides Formed by Angles

Name the vertex and sides formed by the angles:

 <p>Vertex: _____ Sides: _____</p>	 <p>Vertex: _____ Sides: _____</p>
 <p>Vertex: _____ Sides: _____</p>	 <p>Vertex: _____ Sides: _____</p>
 <p>Vertex: _____ Sides: _____</p>	 <p>Vertex: _____ Sides: _____</p>
 <p>Vertex: _____ Sides: _____</p>	 <p>Vertex: _____ Sides: _____</p>