

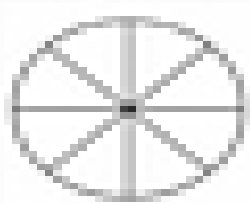
Math = Fractions

Name _____


Fractions: Eighth, Ninth, Tenth

Directions: Follow the directions below.

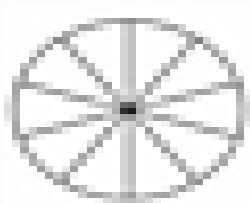
1. Color $\frac{1}{2}$ of the circle.



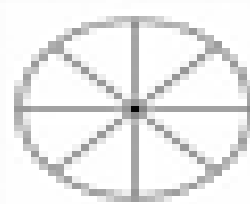
2. Color $\frac{1}{4}$ of the circle.



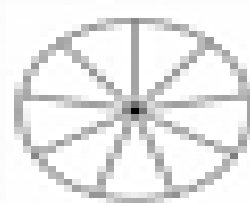
3. Color $\frac{1}{10}$ of the circle.



4. Color $\frac{1}{8}$ of the circle.



5. Color $\frac{1}{8}$ of the circle.



6. Color $\frac{1}{10}$ of the circle.

