

Answer Key!

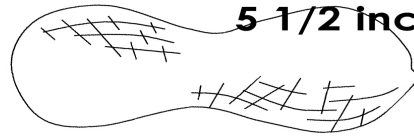
Name _____

HOW LONG IS IT?


Use the rulers to measure each object to the nearest 1/4 inch. Mark your answer on the ruler and write it next to the object. Good luck!




2 1/2 inches



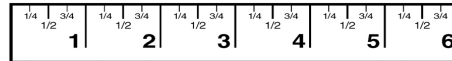
5 1/2 inches



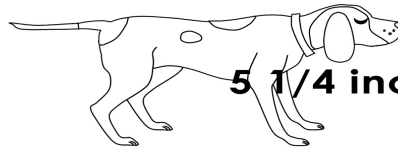
4 1/4 inches




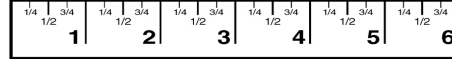
3 inches



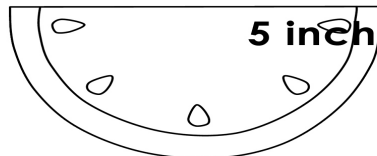
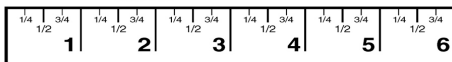
5 3/4 inches



5 1/4 inches



3 3/4 inches



5 inches

