




Name \_\_\_\_\_ Date \_\_\_\_\_ # \_\_\_\_\_

Base Ten Addition and Subtraction 4.1

<p><b>1.</b> Using pictures, words, or numbers, explain how you will add the numbers shown here.</p> 	<p><b>2.</b> Using pictures, words, or numbers, explain how you will add the numbers shown here.</p> 
<p>_____</p>	<p>_____</p>
<p><b>3.</b> Using pictures, words, or numbers, explain how you will add the numbers shown here.</p> 	<p><b>4.</b> Using pictures, words, or numbers, explain how you will add the numbers shown here.</p> 
<p>_____</p>	<p>_____</p>