

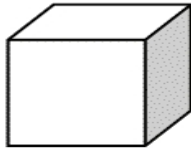
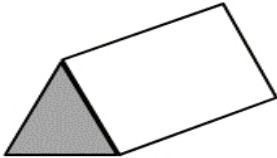
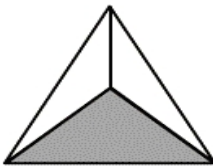

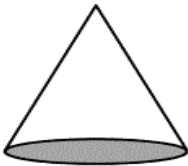
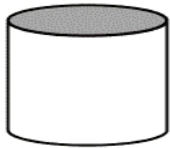
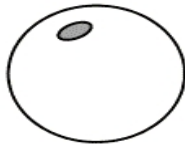
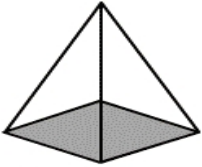
Name

Date

### 3D SHAPE PROPERTIES SHEET 5



Fill in the name, and number of faces, edges and vertices for each shape.

Name: F: E: V:		Name: F: E: V:	
Name: F: E: V:		Name: F: E: V:	
Name: F: E: V:		Name: F: E: V:	
Name: F: E: V:		Name: F: E: V:	

F = FACES, E = EDGES, V = VERTICES



©2010-2011 Math Salamanders Ltd.

[MATH-SALAMANDERS.COM](http://MATH-SALAMANDERS.COM)