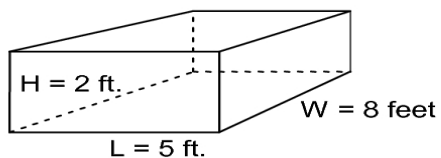


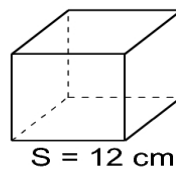
**Volume Worksheet I**  
**Find the VOLUME of each of the following Solids**

**Rectangular Solid**



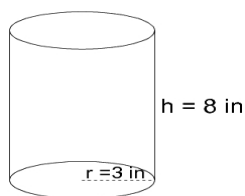
- 1) FORMULA:  
 VOLUME =

**Cube**



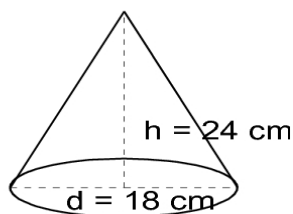
- 2) FORMULA:  
 VOLUME =

**Cylinder**



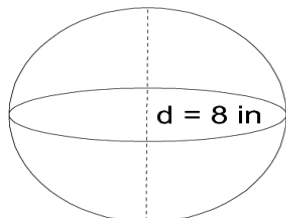
- 3) FORMULA:  
 VOLUME =

**Cone**



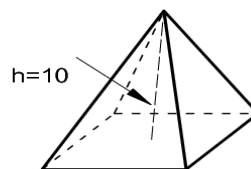
- 4) FORMULA:  
 VOLUME =

**Sphere**



- 5) FORMULA:  
 VOLUME =

**Square Pyramid**



- 6) Formula:  $V = \frac{1}{3} \times (\text{Area of Base}) \times \text{height}$   
 VOLUME =