

Name : \_\_\_\_\_

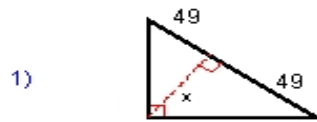
Score : \_\_\_\_\_

Teacher : \_\_\_\_\_

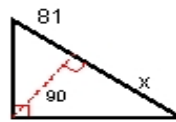
Date : \_\_\_\_\_

### Similar Right Triangles

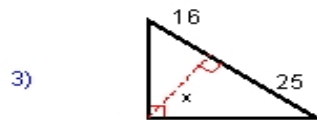
Find  $x$ . Leave your answer in the simplest radical form.



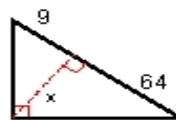
$x = \underline{\hspace{2cm}}$



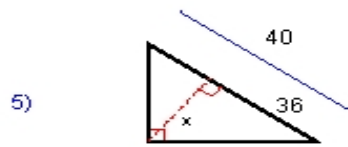
$x = \underline{\hspace{2cm}}$



$x = \underline{\hspace{2cm}}$



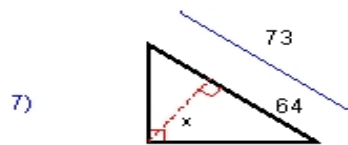
$x = \underline{\hspace{2cm}}$



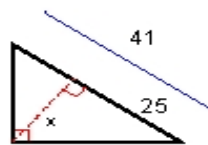
$x = \underline{\hspace{2cm}}$



$x = \underline{\hspace{2cm}}$



$x = \underline{\hspace{2cm}}$



$x = \underline{\hspace{2cm}}$

