




NAME: _____

DATE: _____

Graphing 1

Directions: Graph the items that are in the box. Answer the questions below.



1. How many  were there?

2. How many  were there?

3. How many fall items were there in all?

1. How many  and  were there?

2. How many  and  were there?

3. How many more  are there than  ?
