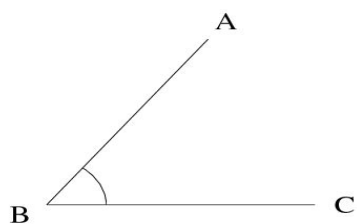


## Measuring Angles (B)

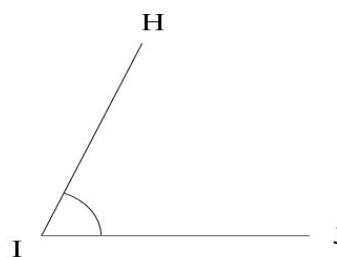
Estimate and measure each angle.

1.



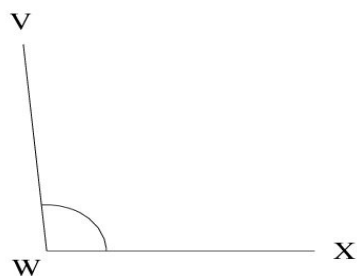
$$m\angle ABC =$$

2.



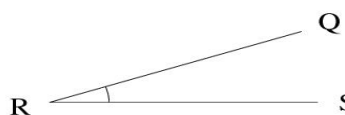
$$m\angle HIJ =$$

3.



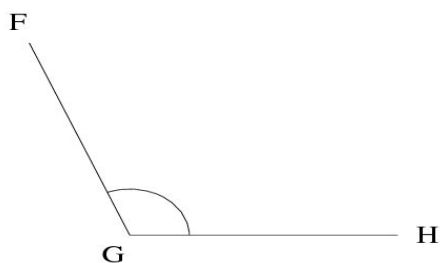
$$m\angle VWX =$$

4.



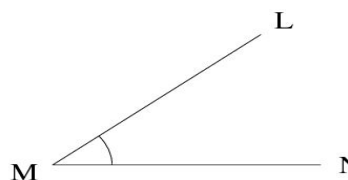
$$m\angle QRS =$$

5.



$$m\angle FGH =$$

6.



$$m\angle LMN =$$