

















Name: _____

Fraction Challenge

Look at the Shaded Portion and Identify the Fraction

Shade the fraction.

- | | |
|---|--|
| 1.  = _____ | 2.  = _____ |
| 3.  = _____ | 4.  = _____ |
| 5.  = _____ | 6.  = _____ |
| 7.  = _____ | 8.  = _____ |
| 9.  = _____ | 10.  = _____ |
| 11.  = _____ | 12.  = _____ |
| 13.  = _____ | 14.  = _____ |