


SOIL EROSION TEST

1. Make two pictures to show what causes erosion.



Explain your pictures

---

---

---

---


---

2. Why is soil erosion more common in areas that do not have lots of plants?


- a. Because plant roots keep the soil in place.
- b. Because plant leaves stop water from hitting the soil too hard.
- c. Because plants make a barrier for wind.
- d. All of the answers are true.
- e. None of the answers are true.

3. Where is it more possible that erosion occurs? Circle the correct letter of the picture

a.



b.



Why do you think that in the picture you chose is more possible to happen erosion?

---

---