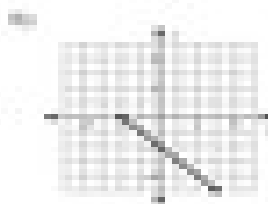




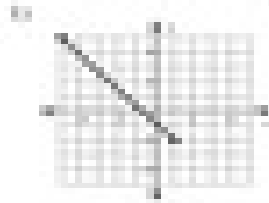


The Distance Formula

Find the distance between each pair of points. Round your answer to the nearest tenth, if necessary.



11) $\sqrt{13}$, $(-1, 5)$, $(2, 2)$, $\sqrt{13}$

21) 5 , $(-2, 1)$, $(3, 1)$, 5

31) $\sqrt{2}$, $(-1, 2)$, $(1, 3)$, $\sqrt{2}$

41) 5 , $(-2, -3)$, $(-2, 2)$, 5

51) 5 , $(-4, -2)$, $(1, -2)$, 5

61) $\sqrt{17}$, $(-2, -1)$, $(3, -4)$, $\sqrt{17}$