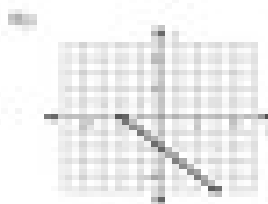




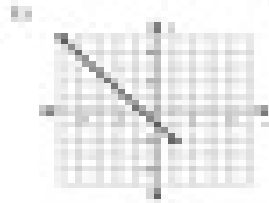


The Distance Formula

Find the distance between each pair of points. Round your answer to the nearest tenth, if necessary.



11) $\sqrt{20}$, $\sqrt{20}$, $\sqrt{20}$

21) $\sqrt{25}$, $\sqrt{25}$, $\sqrt{25}$

31) $\sqrt{5}$, $\sqrt{5}$, $\sqrt{5}$

41) $\sqrt{16}$, $\sqrt{16}$, $\sqrt{16}$

51) $\sqrt{25}$, $\sqrt{25}$, $\sqrt{25}$

61) $\sqrt{25}$, $\sqrt{25}$, $\sqrt{25}$