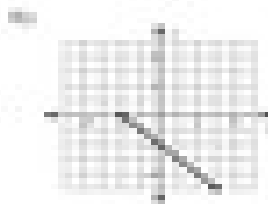




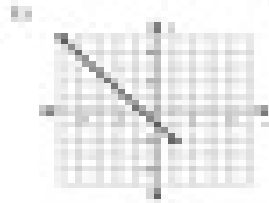


The Distance Formula

Find the distance between each pair of points. Round your answer to the nearest tenth, if necessary.



11) $\sqrt{13}$, $(-1, 5)$, $(2, 2)$, $\sqrt{13}$

21) 5 , $(-2, 1)$, $(3, 1)$, 5

31) $\sqrt{2}$, $(-1, 3)$, $(1, 2)$, $\sqrt{2}$

41) 4 , $(-2, -1)$, $(-2, 3)$, 4

51) 2 , $(-4, -2)$, $(-4, -4)$, 2

61) $2\sqrt{5}$, $(-2, -2)$, $(2, -4)$, $2\sqrt{5}$