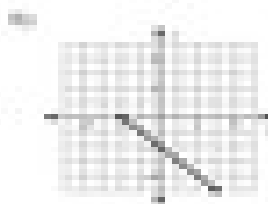




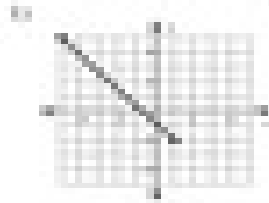


The Distance Formula

Find the distance between each pair of points. Round your answer to the nearest tenth, if necessary.



11) $\sqrt{20}$, $\sqrt{20}$, $\sqrt{20}$

21) $\sqrt{64}$, $\sqrt{64}$, $\sqrt{64}$

31) $\sqrt{2}$, $\sqrt{2}$, $\sqrt{2}$

41) $\sqrt{36}$, $\sqrt{36}$, $\sqrt{36}$

51) $\sqrt{64}$, $\sqrt{64}$, $\sqrt{64}$

61) $\sqrt{16}$, $\sqrt{16}$, $\sqrt{16}$