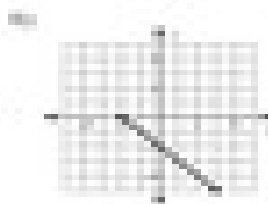




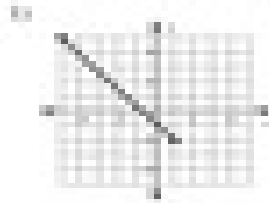


The Distance Formula

Find the distance between each pair of points. Round your answer to the nearest tenth, if necessary.



11)  $\sqrt{20}$ ,  $\sqrt{20}$ ,  $\sqrt{20}$

21)  $\sqrt{64}$ ,  $\sqrt{64}$ ,  $\sqrt{64}$

31)  $\sqrt{5}$ ,  $\sqrt{5}$ ,  $\sqrt{5}$

41)  $\sqrt{36}$ ,  $\sqrt{36}$ ,  $\sqrt{36}$

51)  $\sqrt{64}$ ,  $\sqrt{64}$ ,  $\sqrt{64}$

61)  $\sqrt{25}$ ,  $\sqrt{25}$ ,  $\sqrt{25}$