




Name: _____

Count By Fives on a Clock


Directions: Write the proper time shown on the clocks.














Show this time on the clock.

4:55

