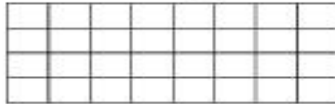


Name: _____

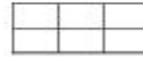
Wednesday

Math Practice: Area (3.MD.6)

Find the area of each rectangle.

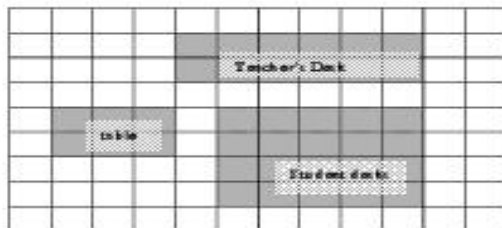


_____ square units



_____ square units


Mrs. Smith is making a floor plan of her classroom. Answer the questions about Mrs. Smith's classroom.



What is the area of the teacher's desk? _____

What is the area of the student desks? _____

What is the area of the table? _____

 = 1 square foot

Look at figure A and B below. Jayden says that Figure A and Figure B have equal area since they are identical. Is Jayden correct? Explain your thinking.



Figure A

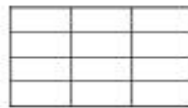



Figure B

 = 1 square inch

Area of Figure A _____

Area of Figure B _____
