

Name: _____

Tuesday

Math Practice: Tell and write time to the nearest minute (3.MD.1)
Measure time intervals in minutes


Write the time displayed on each clock.



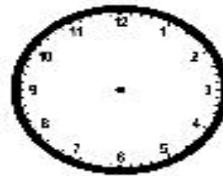
Draw the time on each clock to the nearest minute.



7:19



8:00



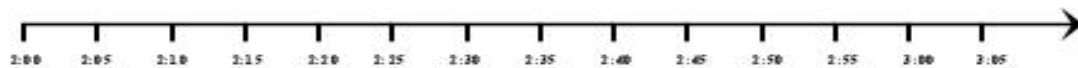
3:55



10:32

Use the number line to help you solve each problem. Write your answer in the blank.

Colleen and her friend are going shopping at the mall. They plan to shop for 50 minutes. If they get to the mall at 2:05 p.m., what time will they be done shopping? _____



Ben arrived to school at 7:45 a.m. It took him 30 minutes to get to school. What time did he leave his house? _____

